

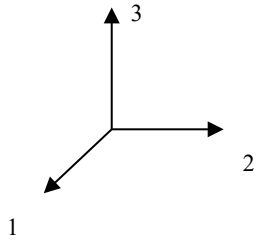
TOPIC

Engineering Mechanics (Statics and Dynamics) – Section VII – Question 4

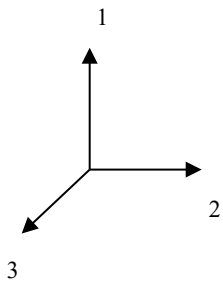
QUESTION

Which of the following is not a right-handed coordinate system?

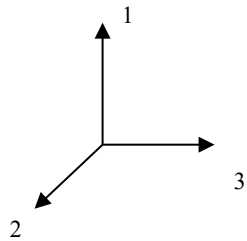
(A)



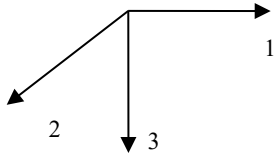
(B)



(C)



(D)



CONTRIBUTOR

Karim Nohra