

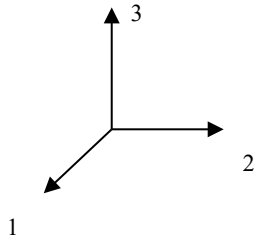
TOPIC

Engineering Mechanics (Statics and Dynamics) – Section VII – Question 4

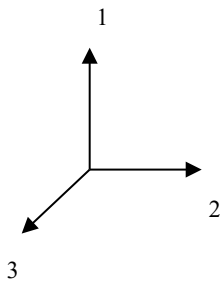
QUESTION

Which of the following is not a right-handed coordinate system?

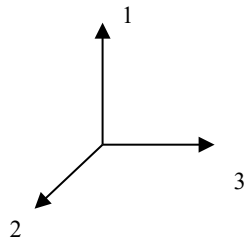
(A)



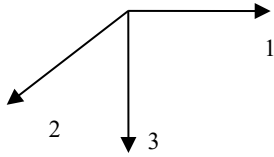
(B)



(C)



(D)

**HINT**

Use the right hand and curl it from 1 to 2 anticlockwise and see which way the thumb is pointing.

SOLUTION

Use the right hand and curl it from 1 to 2 anticlockwise and see which way the thumb is pointing.

ANSWER

(B)

CONTRIBUTOR

Karim Nohra